





# Subtract Fractions

Solve the fractions calculations. Click on the models to subtract the parts. Type the answers in the boxes.

$$\frac{7}{8} - \frac{3}{8} = \frac{\square}{\square}$$


$$\frac{9}{12} - \frac{8}{12} = \frac{\square}{\square}$$


$$\frac{4}{6} - \frac{1}{6} = \frac{\square}{\square}$$


$$\frac{10}{10} - \frac{6}{10} = \frac{\square}{\square}$$


Complete the part-whole models.

